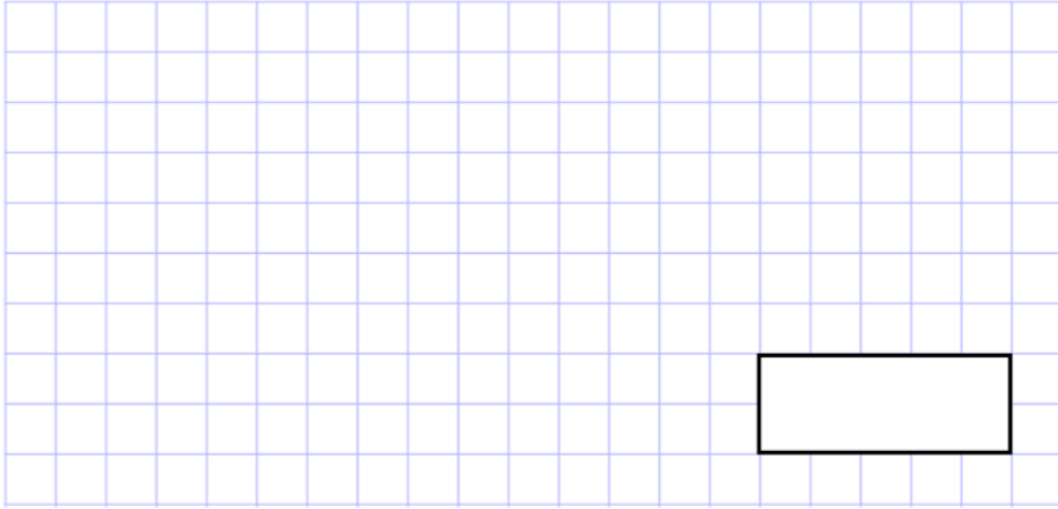


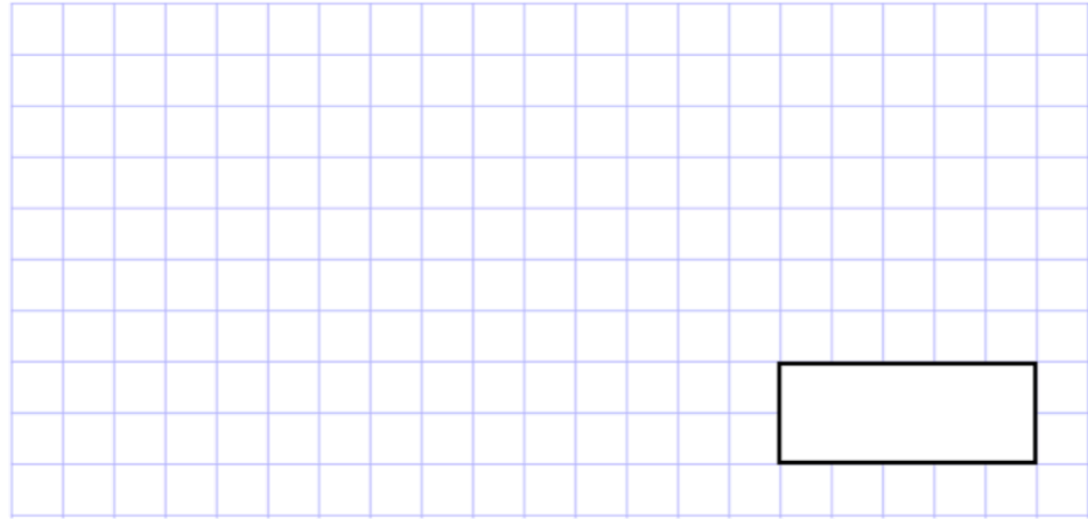
1.

8×100



2.

$1,000 \times 4$



4.

Circle the number that is 10 times smaller than 80

- 90 70 8 800

5.

Natalie wants to buy a car.
She saves £100 a month.



How much money will she have saved after 11 months?

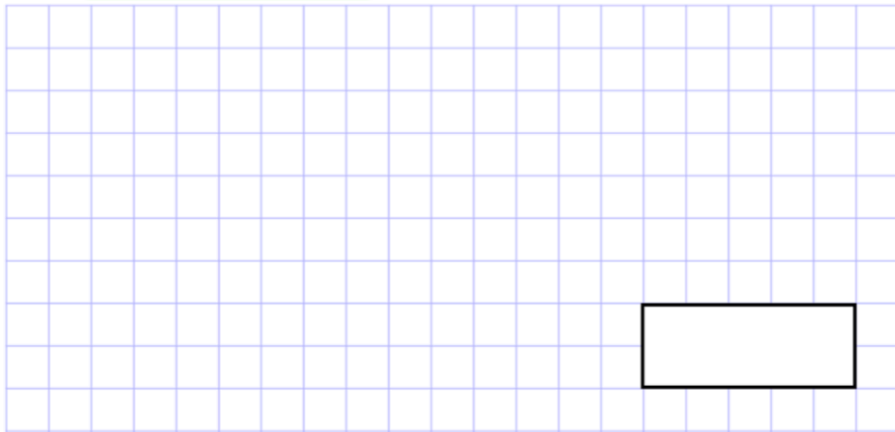
6. A box holds 10 eggs.

Martha buys 45 boxes of eggs.

How many eggs does Martha buy?

9.

$$4,000 \div 100$$

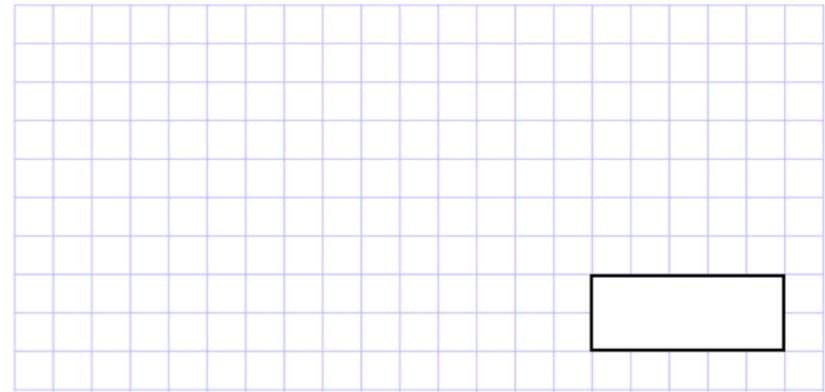


12. Circle the number that is **10 times** greater than eight hundred and forty.

8,040 84 8,004 8,400 840

7.

$$610 \div 10$$



10. A ticket for a charity concert costs £10.

450 tickets are sold.

How much money is raised for charity?

£

18.

$$150,000 \div 10,000$$

A 20x10 grid with a small empty rectangular box at the bottom right for the answer.

21.

$$0.8 \times 10$$

A 20x10 grid with a small empty rectangular box at the bottom right for the answer.

22.

$$1.34 \times 100$$

A 20x10 grid with a small empty rectangular box at the bottom right for the answer.

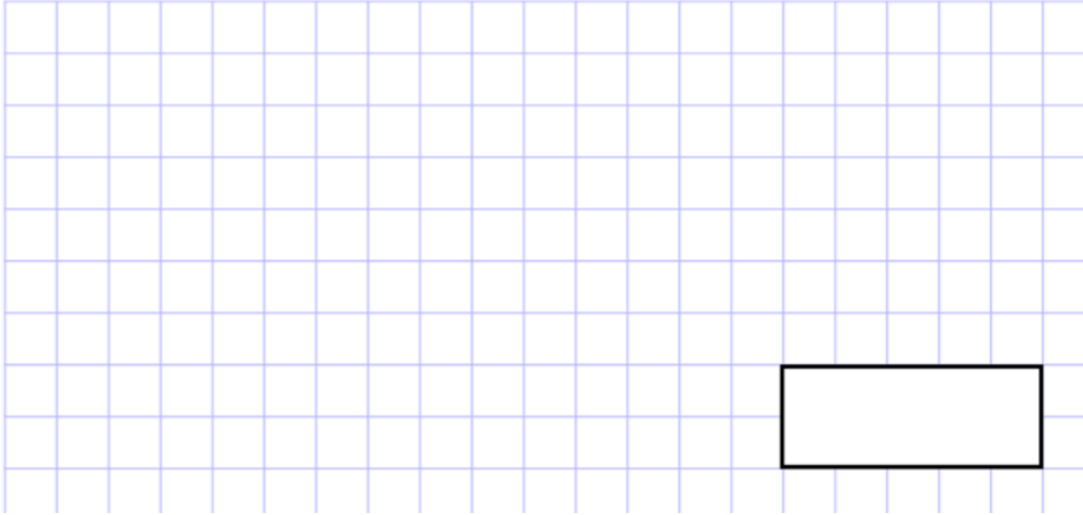
23.

$$61 \div 10$$

A 20x10 grid with a small empty rectangular box at the bottom right for the answer.

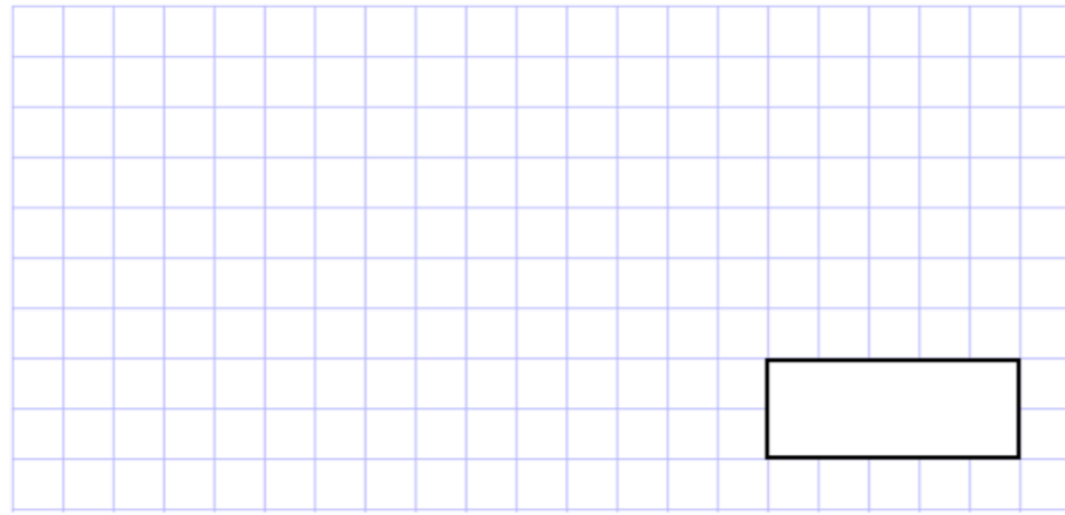
24.

$0.2 \div 10$



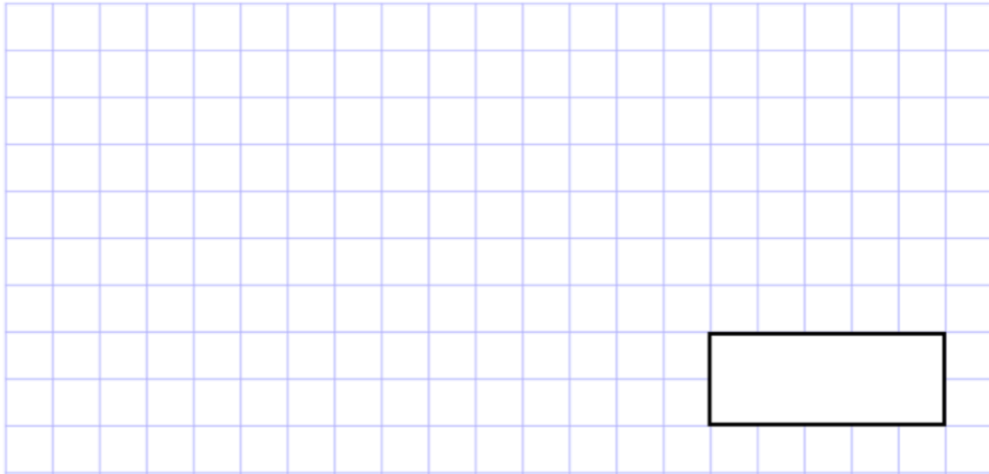
25.

$1.25 \times 1,000$



27.

$40 \div 1,000$



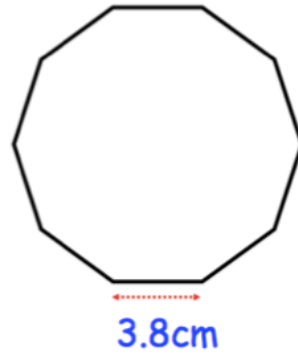
30.

Match the question and the correct answers

$200 \div 10$	0.2
$0.2 \div 10$	20
0.2×10	2
$2 \div 10$	0.02
$2 \div 1000$	0.002

A line connects $200 \div 10$ to 20 .

31. Here is a regular decagon.



Work out the perimeter of the decagon.

_____ cm

